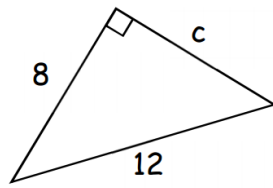
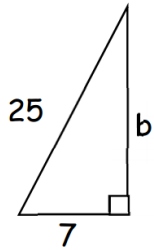
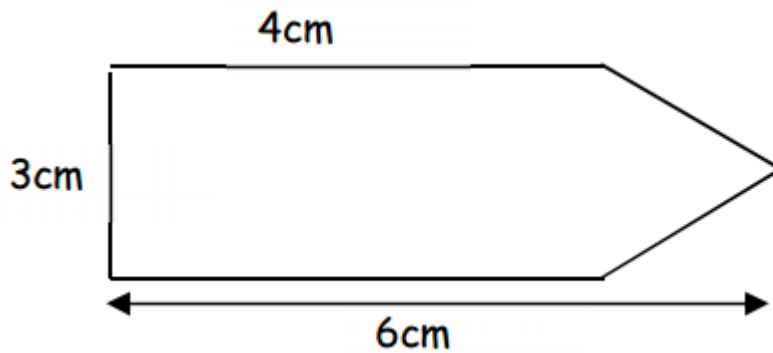


1. Calculate the missing side in each of these right-angled triangles correct to one decimal place.

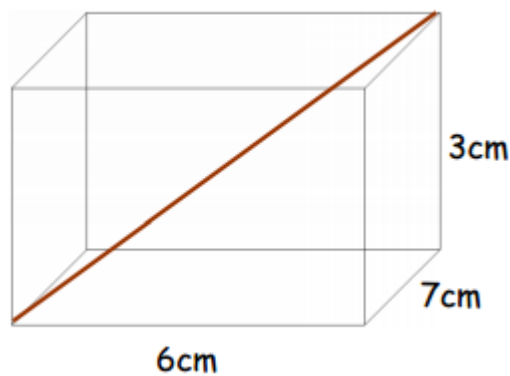


2. How far apart are the points  $A(1,1)$  and  $B(8,5)$ , correct to one decimal place?

3. What is the perimeter of this label?



4. Calculate the length of the space diagonal



5. Is this triangle right-angled?

